

# Problem Solving

Week 4 - One a day

3 4  
5



**REGENT STUDIES**


Focused education on life's walk

[www.regentstudies.com](http://www.regentstudies.com)

# Monday

There were 32 cows in a field. 20 of the cows went for milking.  
Later, 5 came back.

How many cows were in the field then?



# Tuesday

Ms Murphy bought 26 fidget spinners for the prize box. 5 boys and 6 girls won a prize from the box. They all took a fidget spinner.

How many are left in the prize box now?



# Wednesday

15 girls and 17 boys were singing in the choir. 12 more children joined the choir.


How many children are there in the choir altogether?



# Thursday

Rachel had €2. She bought an ice-cream for 55¢ and a bottle of water for €1.

How much change did she get?




# Friday

Mike is 122cm tall. Frank is 15cm taller than Mike.

What height is Frank?





**REGENT STUDIES**

Focused education on life's walk

[www.regentstudies.com](http://www.regentstudies.com)